



TEQIP-III CELL
Bineswar Brahma Engineering College
Kokrajhar (BTAD), ASSAM

NPIU

Post Applied For Accounts Officer

Booklet Number:

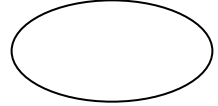
Name of the candidates.....

Roll No.....

Photo ID No.....

Signature of the candidate.....

left hand thumb impression



Signature of the invigilator with date **after verification**.....

Time: 11.00 AM- 01.00PM

- Each **question** in the each section is a **multiple-choice question** with four answer choices.
- Read each **question** and tick answer choice carefully and choose the ONE best answer.
- Each correct answer will score one mark. A mark will not be deducted for a wrong answer.

Section: General Knowledge

Q1. Which of the following is the state bird of Assam?

- a) White winged wood duck
- b) King Fisher

- c) Grey hornbill
- d) Koel bird

Q2. Which of the following is the state flower of Assam?

- a) Rose
- b) Lily

- c) Foxtail Orchids
- d) Dahlia

Q3. Which of the following is the state animal of Assam?

- a) Tiger
- b) Black Buck

- c) Rain Deer
- d) One-horned Rhinoceroses

Q4. Which of the following is the state tree of Assam?

- a) Hollong
- b) Neem

- c) Sal
- d) Coconut

Q5. Which of the following is the state anthem of Assam?

- a) O Mur Apunar Dex
- b) Vande mataram

- c) Sare jahan se accha
- d) Maa tuihe salaam

Q6. Which of the following is the state motto of Assam?

- a) Zoy ai oxom
- b) Vande mataram

- c) Moromor ai oxom
- d) Oxom mur matribhumi

Q7. Which of the following is a bird sanctuary?

- a) Shalmar beel
- b) Dibru-Soikhuwa
- c) Chachoni-Merbil
- d) Deepor beel

Q8. When UNESCO declared Kaziranga as a World Heritage Site?

- a) 1985
- b) 1989
- c) 1900
- d) 1991

Q9. According to 2011 census literacy rate of Assam is _ ?

- a) 53.18%
- b) 56.22%
- c) 66.77%
- d) 73.18 %

Q10. Which refinery was established due to “Assam accord”?

- a) Guwahati
- b) Bangaigaon
- c) Numalighar
- d) Digboi

Q11. Total number of district in Assam is_____?

- a) 27
- b) 32
- c) 33
- d) 35

Q12. By which name Brahmaputra enters india?

- a) Dihang
- b) Siang
- c) Lydong
- d) Huagsu

Q13. How many nation parks are there in assam?

- a) 5
- b) 6
- c) 7
- d) 8

Q14. Which city of Assam has the largest dry fish market of Asia?

- a) Guwahati
- b) Jagiroad
- c) Tangla
- d) Tinisukia

Q15. In Ancient times, Assam is also known by the name of _____.

- (A) Koliabor
- (B) Guwahati
- (C) Pragjyotishpur
- (D) Charaideo

Q16. In which hill top, the Kamakhya Temple is located?

- (A) Nilachal Hill
- (B) Chitrachal Hill
- (C) Sandhyachal Hill
- (D) Jogini Hill

Q17. In which year, the capital of Assam shifted from Shillong to Dispur?

- (A) 1950
- (B) 1955
- (C) 1971
- (D) 1973

Q18. Who was the first Chief Minister of Assam_____.

- (A) Bishnuram Medh
- (B) Tarun Ram Phukan
- (C) Gopinath Bordoloi
- (D) None of the Above

Q19. Who was the last king of Ahom kingdom in Assam?

- (A) Gobar Roja
- (B) Sutanphaa

- (C) Purandar Singha
- (D) Jogeswar Singha

Q20. When Bhupen Hazarika had been awarded with Dadasaheb Phalke Award?

- (A) 1990
- (B) 1992

- (C) 1993
- (D) 1997

Section: English

Find the correctly spelt words.

1 (solve as per the direction given above)

- A. Efficient
- B. Treatmeant
- C. Beterment
- D. Employd

2 (solve as per the direction given above)

- A. Rigerous
- B. Rigourous
- C. Regerous
- D. Rigorous

3 (solve as per the direction given above)

- A. Acommodation
- B. Accomodaton
- C. Accommodation
- D. Acomodation

In the following questions choose the word which is the exact OPPOSITE of the given words.

4 COMMISSIONED

- A. Started
- B. Closed
- C. Finished

- D. Terminated
- 5. COMFORT
 - A. Uncomfort
 - B. Miscomfort
 - C. Discomfort
 - D. None Of These

- 6. DEAR
 - A. Priceless
 - B. Free
 - C. Worthless
 - D. Cheap

Each question consist of two words which have a certain relationship to each other followed by four pairs of related words, Select the pair which has the same relationship.

- 7. AFTER:BEFORE
 - A. first:second
 - B. present:past
 - C. contemporary:historic
 - D. successor:predecessor
- 8. FILTER:WATER
 - A. curtail:activity
 - B. expunge:book
 - C. edit:text
 - D. censor:play
- 9. PORK:PIG
 - A. rooster:chicken
 - B. mutton:sheep
 - C. steer:beef
 - D. lobster:crustacean

Pick out the most effective word(s) from the given words to fill in the blank to make the sentence meaningfully complete.

10. Success in this examination depends hard work alone.

- A. at
- B. over
- C. for
- D. on

11. If you smuggle goods into the country, they may be by the customs authority.

- A. possessed
- B. punished
- C. confiscated
- D. fined

12. My uncle decided to take and my sister to the market.

- A. I
- B. mine
- C. me
- D. myself

In each question below a sentence broken into five or six parts. Join these parts to make a meaningful sentence. The correct order of parts is the answer.

13 1. do 2. today 3. you

4. must 5. it

- A. 34152
- B. 25413
- C. 12543
- D. 51324

14 1. medicine 2. a 3. Neeta 4. given 5. was

- A. 51423
- B. 25431
- C. 15423
- D. 35421

In the questions below the sentences have been given in Active/Passive voice. From the given alternatives, choose the one which best expresses the given sentence in Passive/Active voice

15. Who is creating this mess?

- A. Who has been created this mess?
- B. By whom has this mess been created?
- C. By whom this mess is being created?
- D. By whom is this mess being created?

16 The invigilator was reading out the instructions.

- A. The instructions were read by the invigilator.
- B. The instructions were being read out by the invigilator.
- C. The instructions had been read out by the invigilator.
- D. The instructions had been read by the invigilator.

17 She makes cakes every Sunday.

- A. Every Sunday cakes made by her.
- B. Cakes are made by her every Sunday.
- C. Cakes make her every Sunday.
- D. Cakes were made by her every Sunday.

In the questions below the sentences have been given in Direct/Indirect speech. From the given alternatives, choose the one which best expresses the given sentence in Indirect/Direct speech.

18 I told him that he was not working hard.

- A. I said to him, "You are not working hard."
- B. I told to him, "You are not working hard."

- C. I said, "You are not working hard."
- D. I said to him, "He is not working hard."
19. "If you don't keep quiet I shall shoot you", he said to her in a calm voice.
- A. He warned her to shoot if she didn't keep quiet calmly.
- B. He said calmly that I shall shoot you if you don't be quiet.
- C. He warned her calmly that he would shoot her if she didn't keep quiet.
- D. Calmly he warned her that be quiet or else he will have to shoot her.
- 20 She said that her brother was getting married.
- A. She said, "Her brother is getting married."
- B. She told, "Her brother is getting married."
- C. She said, "My brother is getting married."
- D. She said, "My brother was getting married."

Section: Aptitude

1. Look at this series: 36, 34, 30, 28, 24, ... What number should come next?
- A. 20
- B. 22
- C. 23
- D. 26
2. Look at this series: 22, 21, 23, 22, 24, 23, ... What number should come next?
- A. 22
- B. 24
- C. 25
- D. 26
3. Look at this series: 58, 52, 46, 40, 34, ... What number should come next?
- A. 26

B. 28

C. 30

D. 32

4. Look at this series: 21, 9, 21, 11, 21, 13, 21, ... What number should come next?

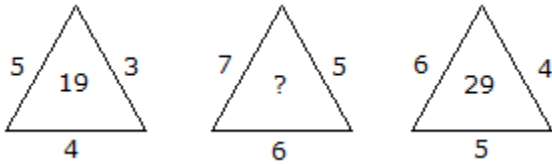
A. 14

B. 15

C. 21

D. 23

5. Which one will replace the question mark ?



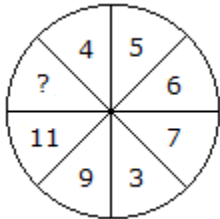
A. 25

B. 37

C. 41

D. 47

6. Which one will replace the question mark ?



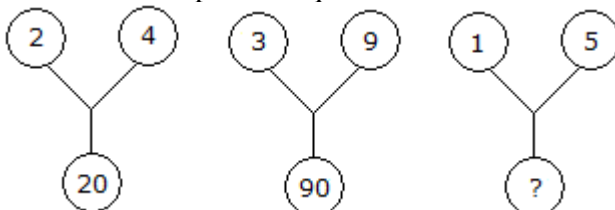
A. 13

B. 14

C. 12

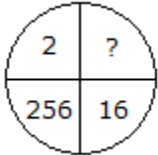
D. 15

7. Which one will replace the question mark ?



- A. 75
- B. 26
- C. 25
- D. 20

8. Which one will replace the question mark ?



- A. 8
- B. 32
- C. 4
- D. 16

9. The total of the ages of Amar, Akbar and Anthony is 80 years. What was the total of their ages three years ago ?

- A. 71 years
- B. 72 years
- C. 74 years
- D. 77 years

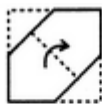
10. A is 3 years older to B and 3 years younger to C, while B and D are twins. How many years older is C to D?

- A. 2
- B. 3
- C. 6
- D. 12

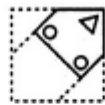
11. Choose a figure which would most closely resemble the unfolded form of Figure (Z).



X



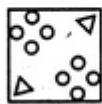
Y



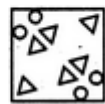
Z



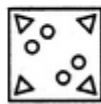
(1)



(2)



(3)

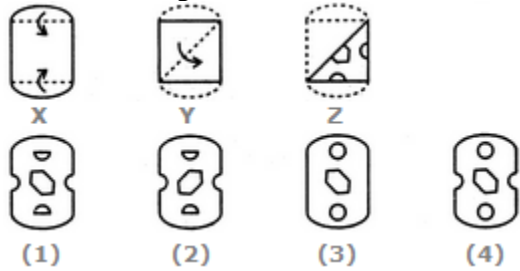


(4)

- A. 1

- B. 2
- C. 3
- D. 4

12. Choose a figure which would most closely resemble the unfolded form of Figure (Z).



- A. 1
- B. 2
- C. 3
- D. 4

13. A train passes a station platform in 36 seconds and a man standing on the platform in 20 seconds. If the speed of the train is 54 km/hr, what is the length of the platform?

- A. 120 m
- B. 240 m
- C. 300 m
- D. None of these

14. Two trains of equal length are running on parallel lines in the same direction at 46 km/hr and 36 km/hr. The faster train passes the slower train in 36 seconds. The length of each train is:

- A. 50 m
- B. 72 m
- C. 80 m
- D. 82 m

15. The cost price of 20 articles is the same as the selling price of x articles. If the profit is 25%, then the value of x is:

- A. 15
- B. 16
- C. 18

D. 25

16. A man buys a cycle for Rs. 1400 and sells it at a loss of 15%. What is the selling price of the cycle?

A. Rs. 1090

B. Rs. 1160

C. Rs. 1190

D. Rs. 1202

17. pumps, working 8 hours a day, can empty a tank in 2 days. How many hours a day must 4 pumps work to empty the tank in 1 day?

A. 9

B. 10

C. 11

D. 12

18. A, B and C can do a piece of work in 20, 30 and 60 days respectively. In how many days can A do the work if he is assisted by B and C on every third day?

A. 12 days

B. 15 days

C. 16 days

D. 18 days

19. A alone can do a piece of work in 6 days and B alone in 8 days. A and B undertook to do it for Rs. 3200. With the help of C, they completed the work in 3 days. How much is to be paid to C?

A. Rs. 375

B. Rs. 400

C. Rs. 600

D. Rs. 800

20. A batsman scored 110 runs which included 3 boundaries and 8 sixes. What percent of his total score did he make by running between the wickets?

A. 45%

B. $45\frac{5}{11}\%$

C. $54\frac{6}{11}\%$

D. 55%

Section: Technical

1. How many types of Measurement Units we can create in Tally?
A. 5 B. 4 C. 3 D. 2
2. What is the full of TCS?
A. Tax Collected from Sales B. Tax Collected by Staff
C. Tax Consumption at Source D. Tax Collected at Source
3. Predefined Billing terms can be maintained through
A. Voucher Class B. Cost Center C. Stock Categories D. Maintain Multiple Godowns
4. The shortcut key to quit from Tally is
A. Ctrl + P B. Ctrl + Q C. Ctrl + M D. Ctrl + L
5. We can create multiple users in Tally activating
A. Maintain VAT B. Tally Audit C. Use Security Control D. Both a and b
6. How many inbuilt Accounts group are in Tally by default?
A. 29 B. 31 C. 25 D. 34
7. Sales Tax Ledger falls under which Group?
A. Sales B. Purchases C. Duties and Taxes D. Indirect Expenses
8. To change Current Date from Gateway of Tally press the key
A. F1 B. F2 C. F5 D. F9
9. Suspense Account Group is defined under
A. Assets B. Income C. Expenditure D. Liabilities
10. Company Restore option is available in
A. Configuration B. Company Features C. Company Information D. Both a and b
11. F12 is known as

